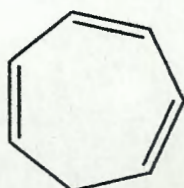


Name: Key

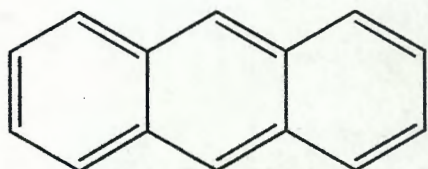
Indicate if the molecule or ion is aromatic, non-aromatic, or anti-aromatic.



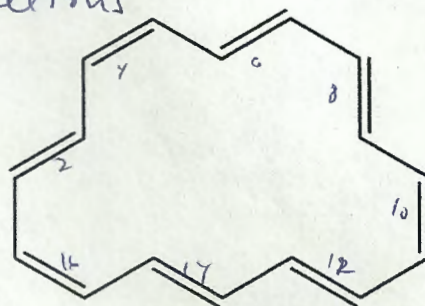
not planar so
non-aromatic



6 π electrons so aromatic



14 π electrons
so aromatic



16 π electrons
so anti-aromatic

2) Give the products for the following reactions.

